



Cambridge Assessment International Education
Cambridge International General Certificate of Secondary Education (9–1)

CANDIDATE NAME

CENTRE NUMBER

CANDIDATE NUMBER



CO-ORDINATED SCIENCES

0973/41

Paper 4 Theory (Extended)

May/June 2019

2 hours

Candidates answer on the Question Paper.

No Additional Materials are required.

READ THESE INSTRUCTIONS FIRST

Write your centre number, candidate number and name on all the work you hand in.

Write in dark blue or black pen.

You may use an HB pencil for any diagrams or graphs.

Do not use staples, paper clips, glue or correction fluid.

DO NOT WRITE IN ANY BARCODES.

Answer **all** questions.

Electronic calculators may be used.

You may lose marks if you do not show your working or if you do not use appropriate units.

A copy of the Periodic Table is printed on page 32.

At the end of the examination, fasten all your work securely together.

The number of marks is given in brackets [] at the end of each question or part question.

This document consists of **30** printed pages and **2** blank pages.

1 (a) The graph in Fig. 1.1 shows the effect of light intensity on the rate of photosynthesis.

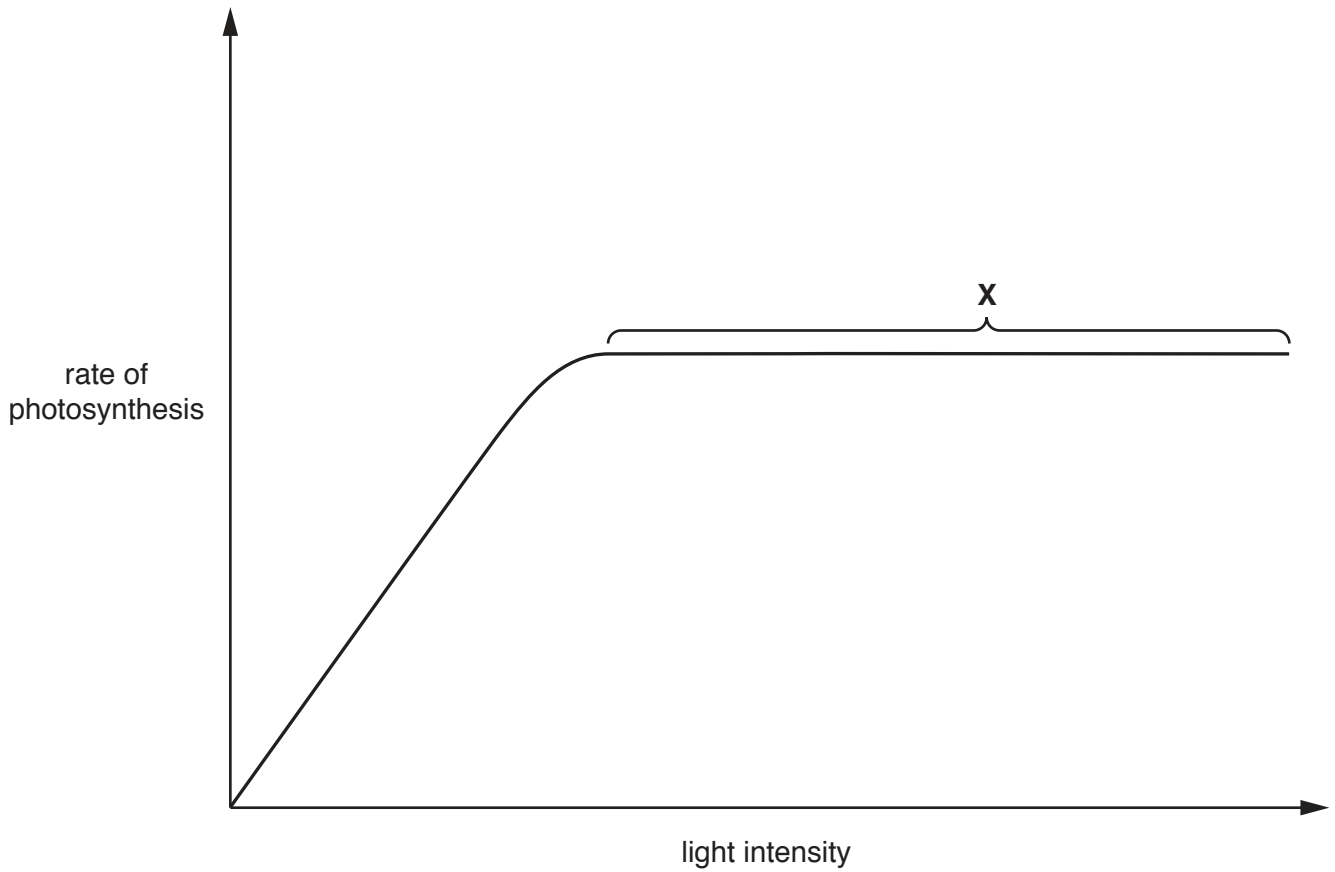


Fig. 1.1

(i) Describe the results shown in Fig. 1.1.

.....
.....
.....
..... [2]

(ii) Explain the reasons for the shape of the part of the graph labelled X.

.....
.....
.....
..... [2]

(b) Fig. 1.2 shows a cross-section through a leaf.

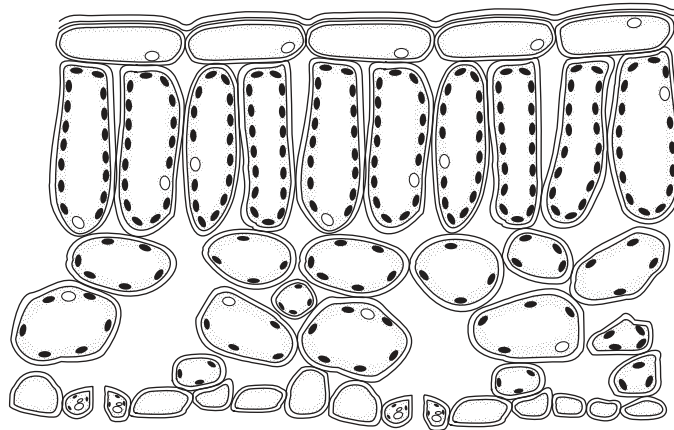


Fig. 1.2

(i) Describe **two** features of the leaf shown in Fig. 1.2 that allow efficient gas exchange to occur.

1

.....

2

.....

[2]

(ii) On Fig. 1.2, use a label line to label an example of a cell that is best adapted for photosynthesis.

Include the name of the cell. [2]

(c) State the chemical formulae of the **two** products of photosynthesis.

1

2

[1]

[Total: 9]

2 (a) Carbon is used to extract zinc from zinc oxide, ZnO.

(i) Write a balanced symbol equation for this reaction.

..... [2]

(ii) Zinc oxide consists of Zn^{2+} and O^{2-} ions.

State which ion is being reduced in this reaction.

Explain your answer in terms of the movement of electrons.

..... [1]

(iii) Explain why carbon **cannot** be used to extract aluminium from aluminium oxide.

..... [1]

(b) Aluminium is extracted by the electrolysis of aluminium oxide.

Aluminium oxide consists of Al^{3+} and O^{2-} ions.

Fig. 2.1 shows the industrial apparatus used to produce aluminium.

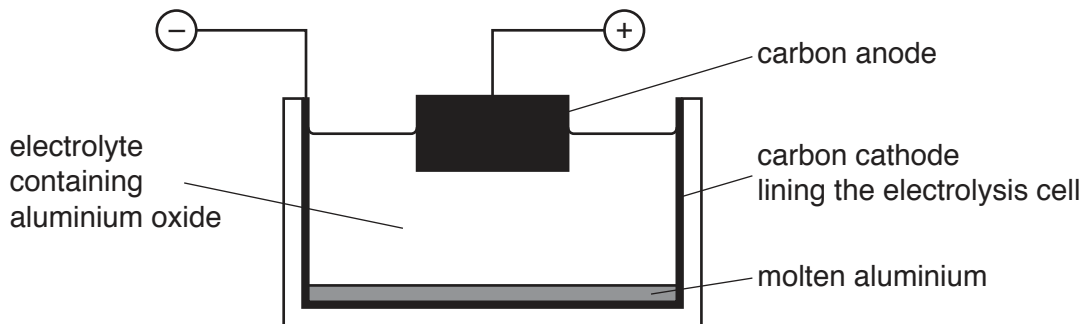


Fig. 2.1

(i) State the name of an ore that contains aluminium.

..... [1]

(ii) Explain why aluminium oxide must be in a liquid state for electrolysis to occur.

.....
..... [1]

(iii) Explain why cryolite is mixed with aluminium oxide for use in this electrolysis.

.....
..... [1]

(iv) Write the ionic half-equation for the reaction occurring at the cathode during this electrolysis.

..... [2]

(c) Aluminium ore is a finite resource, so aluminium must be conserved.

(i) State what is meant by the term *finite resource*.

.....
..... [1]

(ii) Suggest how aluminium can be conserved.

.....
..... [1]

[Total: 11]

3 Fig. 3.1 shows a motorcycle with a rear lamp.




Fig. 3.1

(a) The lamp has a resistance of $30\ \Omega$ and is powered by a 12 V battery.

(i) Show that the current in the lamp is 0.40 A.

[1]

(ii) Calculate the power used by the lamp.

Show your working.

power = W [2]

(iii) Calculate the charge that passes through the lamp in 30 minutes.

Show your working.

charge = C [2]

(b) The battery is charged by an a.c. generator.

Fig. 3.2 shows a simple a.c. generator.

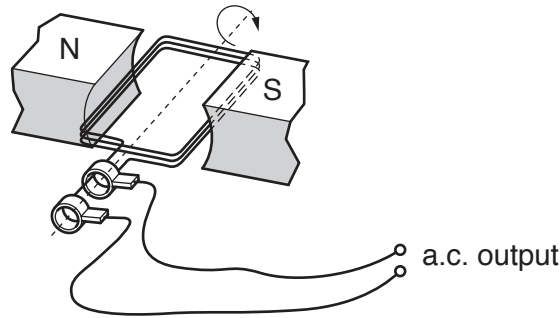


Fig. 3.2

- (i) On Fig. 3.2, label the slip rings with the letter **R**. [1]
- (ii) On Fig. 3.2, label the coil with the letter **C**. [1]
- (iii) On Fig. 3.2, show the direction of the magnetic field with an arrow (\rightarrow). [1]
- (iv) The output is an alternating current. Describe the difference between direct current (d.c.) and alternating current (a.c.).

.....

 [1]

(c) The motorcycle engine is noisy and emits sound waves that pass through the air.

The sound waves pass through the air as a series of compressions (C) and rarefactions (R).

Fig. 3.3 shows the positions of the compressions and rarefactions as the sound wave passes through the air.



Fig. 3.3

Suggest how and explain why the positions of the compressions and rarefactions change if the pitch of the sound increases.

.....

 [3]

4 The pie chart in Fig. 4.1 shows the different causes of deforestation in a country.

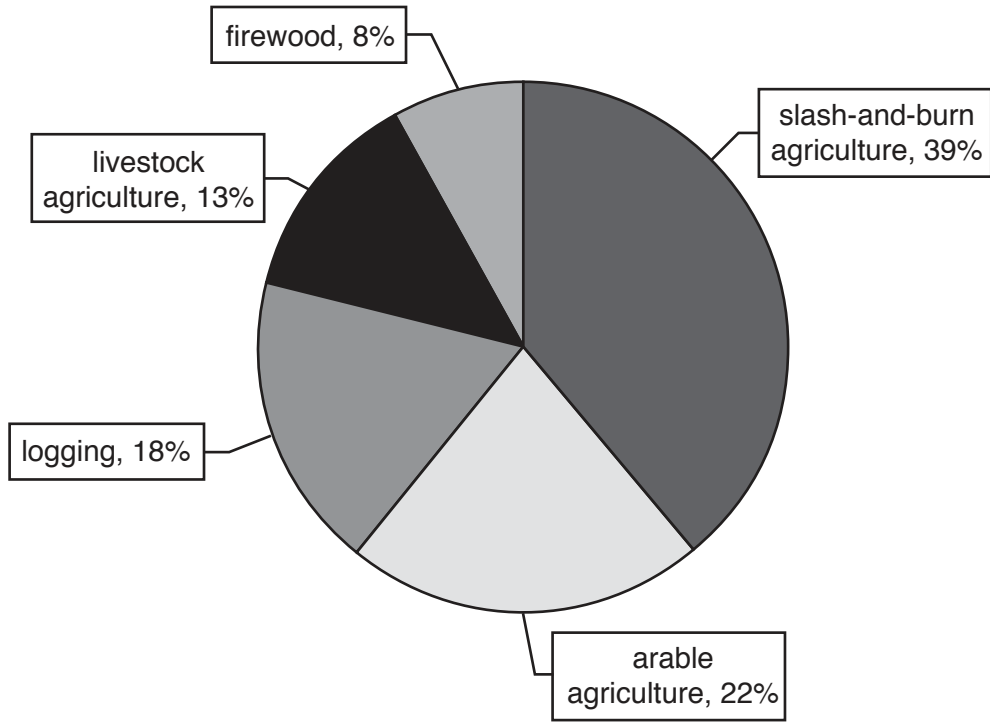


Fig. 4.1

(a) Calculate the **total** percentage of deforestation caused by agriculture.

.....% [1]

(b) Describe how slash-and-burn agriculture can increase the carbon dioxide concentration in the atmosphere.

.....

.....

.....

.....

.....

..... [3]

(c) Describe the undesirable effects of deforestation on soil.

.....

.....

.....

.....

..... [3]

(d) Forests are ecosystems.

Define the term *ecosystem*.

.....

.....

.....

..... [2]

[Total: 9]

5 Petroleum is the raw material for the production of many useful substances.

Fig. 5.1 shows processes **A**, **B** and **C** that can be used in the production of ethanol.

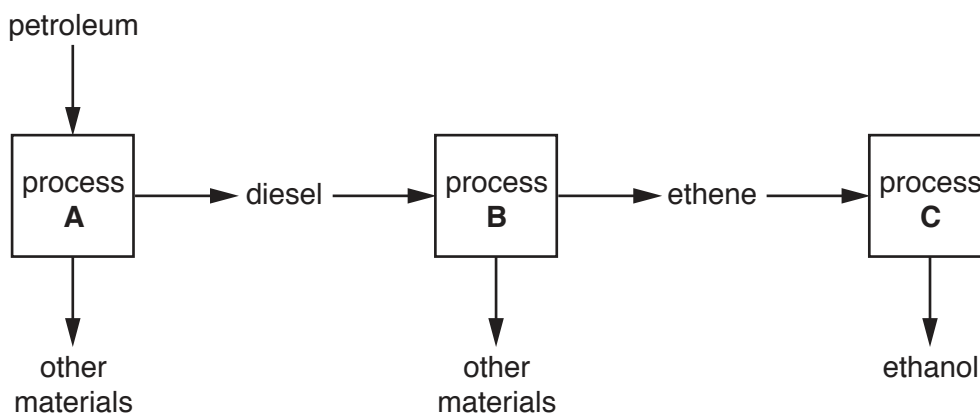


Fig. 5.1

(a) Name the processes by drawing one line from each process to its name.

process	name
	catalytic addition
A	cracking
B	fermentation
C	fractional distillation
	polymerisation

[2]

(b) The formula of ethanol is C_2H_5OH .

Explain why ethanol is **not** a hydrocarbon.

.....
 [1]

(c) Fig. 5.2 shows a camping stove which uses ethanol as the fuel.

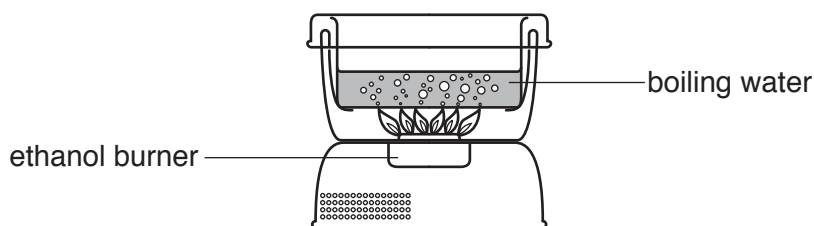
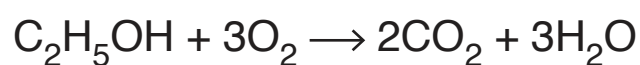


Fig. 5.2

Complete combustion of ethanol produces carbon dioxide and water.

The balanced equation for this reaction is shown.



The stove uses 22g of ethanol to boil 1 dm³ of water.

- (i) Complete steps 1 to 3 to calculate the maximum mass of carbon dioxide produced when boiling 1 dm³ of water.

Show your working.

[M_r: carbon dioxide, 44; ethanol, 46]

Step 1

Calculate the number of moles in 22g of ethanol.

number of moles =

Step 2

Calculate the number of moles of carbon dioxide produced when 22g of ethanol burns.

number of moles =

Step 3

Calculate the mass of carbon dioxide produced when boiling 1 dm³ of water.

mass = g
[3]

- (ii) A similar stove uses butane as the fuel.

Butane produces less carbon dioxide when boiling 1 dm³ of water.

Suggest whether using the butane stove or the ethanol stove causes less damage to the environment.

Explain your answer.

type of stove

explanation

.....

.....

[2]

[Total: 8]

- 6 (a) The visible light produced by the headlamps of a train is part of the electromagnetic spectrum.
- (i) Write visible light in the correct position in the incomplete electromagnetic spectrum in Fig. 6.1.

gamma		ultraviolet			microwaves	
-------	--	-------------	--	--	------------	--

Fig. 6.1

[1]

- (ii) All electromagnetic waves travel at the same speed.

State the speed of light in a vacuum.

..... m/s [1]

- (b) The approaching train can be heard through the air and as a ringing sound in the steel rails.

The speed of sound in air is 330 m/s and the speed of sound in steel is 6000 m/s.

- (i) Suggest a value for the speed of sound through water.

Explain your answer.

speed of sound in water = m/s

explanation

..... [1]

- (ii) Calculate the time difference between a sound travelling 0.50 km through air and 0.50 km through steel rails.

Show your working.

time difference = s [2]

- (iii) The train emits sound waves with a frequency of 500 Hz which travel through the air at a speed of 330 m/s.

Calculate the wavelength of these waves.

Show your working.

wavelength = m [2]

- (iv) Sound waves are longitudinal waves. Visible light waves are transverse waves.

Describe the differences between longitudinal and transverse waves in terms of the direction of travel of the waves, and the direction of oscillation or vibration.

You may draw a diagram if it helps your answer.

.....

.....

.....

.....

..... [2]

[Total: 9]

- 7 (a) A student investigates the effect of temperature on the rate of diffusion of red dye into agar jelly cubes.

The student prepares three cubes of agar jelly **A**, **B** and **C**.

- Each cube is equal in size.
- **A** is kept at 30°C, **B** is kept at 25°C, **C** is kept at 20°C.
- Three separate containers of red dye are also kept at 30°C, 25°C and 20°C.
- Each cube is immersed in red dye equal to its temperature for 10 minutes.
- The cubes are then removed from the dye and cut in half.

Fig. 7.1 shows the cubes cut in half.

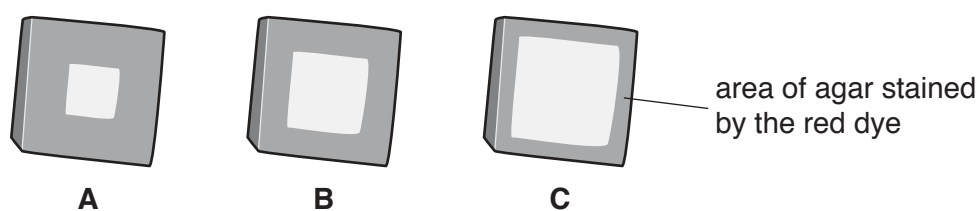


Fig. 7.1

Table 7.1 shows the results.

Table 7.1

cube	temperature of cube and dye/°C	diffusion distance (after 10 minutes)/cm	rate of diffusion/cm per min
A	30	1.0	
B	25	0.7	0.07
C	20	0.5	0.05

- (i) Calculate the rate of diffusion for cube **A**.

..... cm per min [1]

(ii) Use the results in Table 7.1 to describe the relationship between temperature and the rate of diffusion.

.....
..... [1]

(iii) State **one** variable, other than the size of the cubes, that should be kept constant in this investigation.

..... [1]

(b) Explain why the red dye diffuses into the agar jelly.

.....
.....
.....
.....
..... [2]

(c) Materials diffuse in and out of living cells.

Name the gas produced by respiration that diffuses **out** of cells.

..... [1]

[Total: 6]

- 8 (a) (i) Using information in the Periodic Table on page 32, calculate the relative molecular masses of the gases nitrogen and chlorine.

M_r (nitrogen) =

M_r (chlorine) = [1]

- (ii) Using your answer to (a)(i), state and explain which of these two gases diffuses at the greater rate.

gas

explanation

..... [1]

- (b) Chlorine occurs naturally as a mixture of mainly two isotopes, chlorine-35 and chlorine-37.

Complete Table 8.1 to show some information about the atomic structures of these isotopes.

Table 8.1

isotope	number of nucleons	number of protons	number of neutrons	number of electrons
chlorine-35	35	17		
chlorine-37	37	17		

[2]

- (c) A student mixes colourless aqueous solutions of chlorine and sodium bromide.

Fig. 8.1 shows the apparatus she uses.

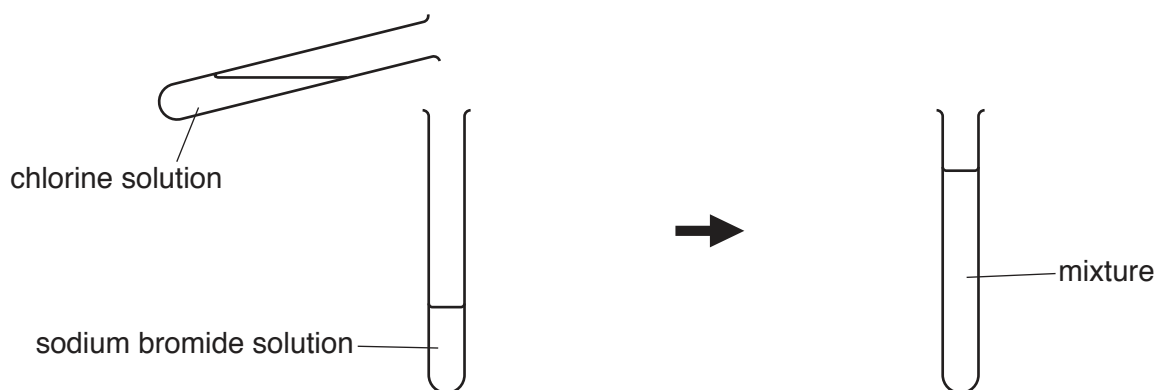


Fig. 8.1

- (i) A reaction occurs when chlorine solution is mixed with sodium bromide solution.

Predict and explain the student's observation when these solutions are mixed.

observation

explanation

[2]

- (ii) Write a word equation for the reaction that occurs when these solutions are mixed.

..... [2]

- (d) The student adds an orange solution of bromine to a colourless solution of sodium fluoride.

Predict and explain the student's observation when the solution of bromine is added to the solution of sodium fluoride.

observation

explanation

[2]

[Total: 10]

- 9 (a) During a mission to the Moon in 1971, an astronaut dropped a feather and a hammer.

The feather and hammer were released from the same height at the same time. Both fell for 1.3s, and landed at the same time.

The acceleration due to gravity on the Moon is 1.6 m/s^2 .

Assume that the Moon has no atmosphere.

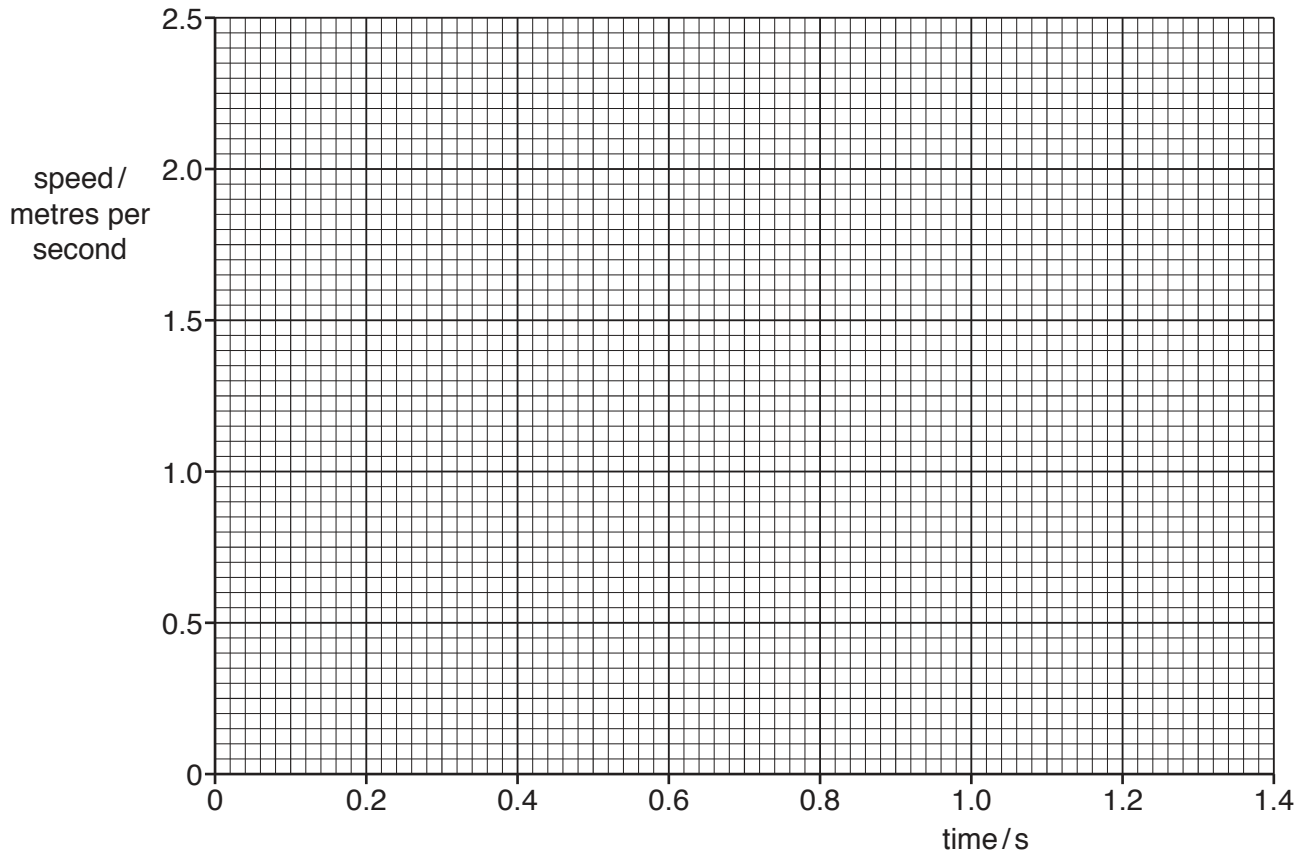


Fig. 9.1

- (i) On Fig. 9.1 draw the speed-time graph for the falling feather. [2]

(ii) The experiment is repeated on Earth. State **two** differences in the results obtained.

Explain your answers.

difference 1

explanation

.....

.....

difference 2.....

explanation

.....

.....

[4]

(b) The astronaut wears a white suit rather than a black suit.

Suggest and explain a reason for this.

.....

.....

..... [2]

(c) The astronaut is exposed to more ionising radiation than people who remain on the Earth.

State **one** harmful effect of ionising radiation on the human body.

.....

..... [1]

(d) Alpha radiation is one form of ionising radiation.

An isotope of plutonium, ${}_{94}^{239}\text{Pu}$, decays by alpha emission to produce an isotope of uranium.

Use the correct nuclide notation to write a symbol equation for this decay process.



[2]

[Total: 11]

10 (a) Fig. 10.1 shows a cross-section through a vein when seen under a light microscope.

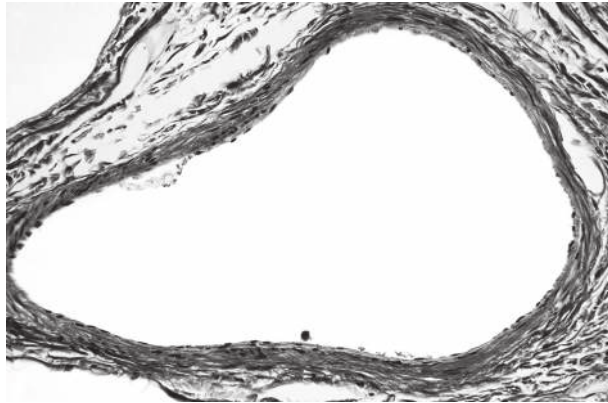


Fig. 10.1

(i) On Fig. 10.1 draw two label lines to identify the:

- lumen
- wall of the vein.

[2]

(ii) Name **one** structure of veins **not** visible in Fig. 10.1.

..... [1]

(b) Explain why the wall of an artery is much thicker than the wall of a vein.

.....
.....
.....
..... [2]

(c) Coronary heart disease is caused by a blockage in the coronary arteries.

State **two** lifestyle factors that **increase** the risk of coronary heart disease.

1.....
2..... [2]

(d) Hormones are released into blood.

(i) Name the hormone that:

- is released in stressful situations

.....

- **decreases** the glucose concentration of the blood.

.....

[2]

(ii) Auxin is a plant hormone.

State the effect of auxin on plant cells.

..... [1]

[Total: 10]

- 11 (a) A student investigates the rate of reaction of calcium carbonate with dilute hydrochloric acid.

The word equation for the reaction is shown.

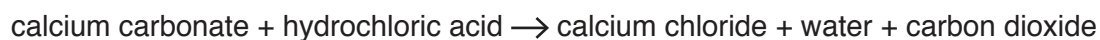


Fig. 11.1 shows some of the apparatus he uses.




Fig. 11.1

- (i) Suggest what other equipment he needs and how he would use it to calculate the rate of carbon dioxide produced.

You may draw on Fig. 11.1 to help your answer.

.....

.....

.....

.....

..... [2]

(ii) He carries out the experiment using dilute hydrochloric acid at 20 °C.

He repeats the experiment at 30 °C.

Fig. 11.2 shows his results.

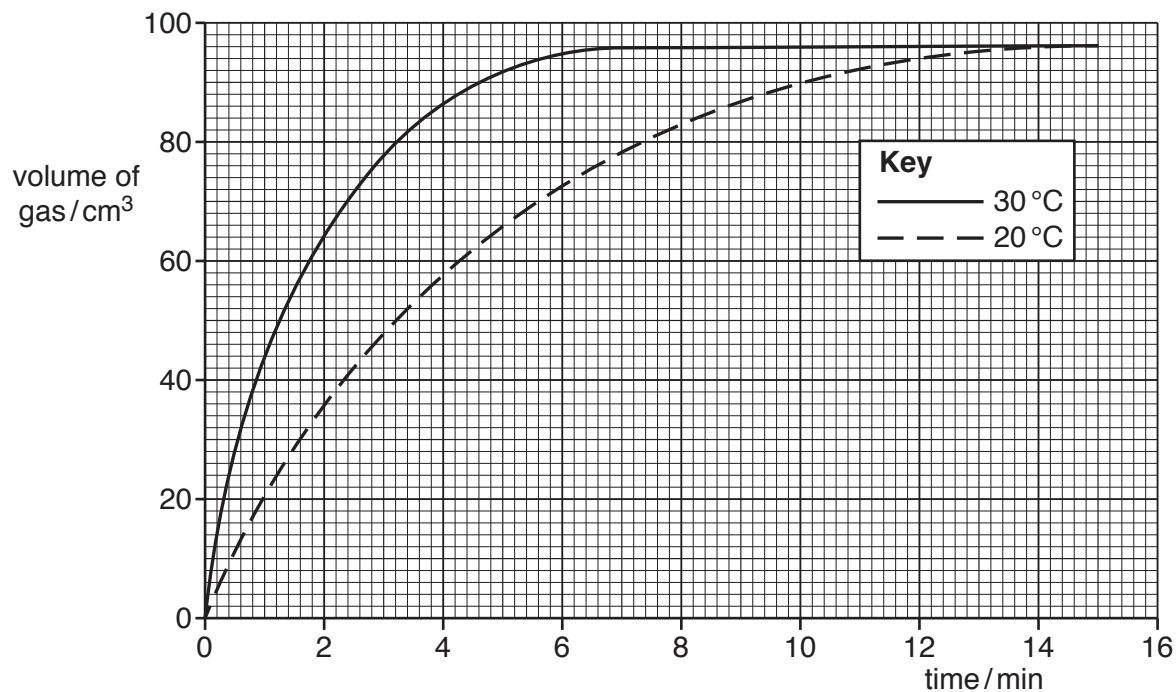


Fig. 11.2

State and explain the differences between the graphs in terms of the movement of reacting particles.

.....

.....

.....

.....

..... [3]

(b) Lead chloride is an insoluble salt.

Describe a method of making solid lead chloride from reactants chosen from Table 11.1.

Table 11.1

compound	solubility in water
calcium chloride	soluble
calcium nitrate	soluble
calcium sulfate	insoluble
lead carbonate	insoluble
lead nitrate	soluble
lead sulfate	insoluble
magnesium sulfate	soluble
silver chloride	insoluble
sodium chloride	soluble
sodium nitrate	soluble

reactants and

method

.....

.....

.....

[4]

(c) Lead chloride has a melting point of 501 °C.

Explain how the structure of lead chloride causes it to have a high melting point.

.....

.....

..... [2]

[Total: 11]

12 Fig. 12.1 shows a solar-powered golf cart, with solar cells on the roof.




Fig. 12.1

The solar cells produce electrical energy using solar energy. The Sun is the source of this energy.

(a) Name **two** energy resources that do **not** have the Sun as their source of energy.

1

2

[1]

(b) During the golf cart's journey, the temperature in the tyres increases.

The volume of air in the tyres does not change.

Explain in terms of molecules the effect on the pressure of a gas due to an increase in temperature at constant volume.

.....

.....

.....

..... [2]

(c) The golf cart often travels across sloping fields so stability is important in its design.

Fig. 12.2 shows the cart on a slope.




Fig. 12.2

The centre of mass of the golf cart is shown by the letter **X**.

State the effect of raising the centre of mass of the golf cart on its stability.

.....
 [1]

(d) A spectator takes a photograph of a golfer with a camera.

The camera uses a thin converging lens to focus light rays onto the light sensor inside the camera.

(i) Complete the ray diagram in Fig. 12.3 to show this.

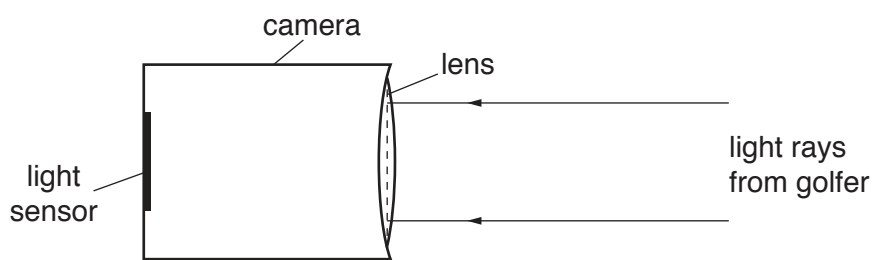


Fig. 12.3

[1]

(ii) The lens is made from glass. Glass has a refractive index of 1.33.

Define refractive index in terms of the speed of light in a vacuum and in glass.

.....
 [1]

(iii) The image produced by the lens on the light sensor is a real image.

Describe the difference between a real image and a virtual image.

.....
..... [1]

(e) Describe in terms of the forces between the atoms why solids have a fixed shape.

.....
..... [1]

[Total: 8]

13 Enzymes are biological catalysts with a specific shape.

(a) Explain the importance of the shape of an enzyme.

.....

.....

.....

.....

..... [3]

(b) A student tests different solutions for the nutrients they contain.

Table 13.1 shows the results.

Table 13.1

solution	colour with iodine solution	colour with Biuret solution	colour with Benedict's solution
A	blue-black	blue	red
B	yellow-brown	blue	blue
C	blue-black	purple	red
D	yellow-brown	blue	red
E	blue-black	blue	green

One of the solutions **A**, **B**, **C**, **D** or **E** contains an enzyme.

Using the information in Table 13.1 identify which solution contains an enzyme.

Explain your answer.

solution

explanation

.....

.....

[3]

[Total: 6]

BLANK PAGE

Permission to reproduce items where third-party owned material protected by copyright is included has been sought and cleared where possible. Every reasonable effort has been made by the publisher (UCLES) to trace copyright holders, but if any items requiring clearance have unwittingly been included, the publisher will be pleased to make amends at the earliest possible opportunity.

To avoid the issue of disclosure of answer-related information to candidates, all copyright acknowledgements are reproduced online in the Cambridge Assessment International Education Copyright Acknowledgements Booklet. This is produced for each series of examinations and is freely available to download at www.cambridgeinternational.org after the live examination series.

Cambridge Assessment International Education is part of the Cambridge Assessment Group. Cambridge Assessment is the brand name of the University of Cambridge Local Examinations Syndicate (UCLES), which itself is a department of the University of Cambridge.

The Periodic Table of Elements

		Group							
I	II	III	IV	V	VI	VII	VIII		
3 Li lithium 7	4 Be beryllium 9	1 H hydrogen 1	5 B boron 11	6 C carbon 12	7 N nitrogen 14	8 O oxygen 16	9 F fluorine 19	10 Ne neon 20	
11 Na sodium 23	12 Mg magnesium 24	Key atomic number atomic symbol name relative atomic mass		13 Al aluminium 27	14 Si silicon 28	15 P phosphorus 31	16 S sulfur 32	17 Cl chlorine 35.5	18 Ar argon 40
19 K potassium 39	20 Ca calcium 40	21 Sc scandium 45	22 Ti titanium 48	23 V vanadium 51	24 Cr chromium 52	25 Mn manganese 55	26 Fe iron 56	27 Co cobalt 59	28 Ni nickel 59
37 Rb rubidium 85	38 Sr strontium 88	39 Y yttrium 89	40 Zr zirconium 91	41 Nb niobium 93	42 Mo molybdenum 96	43 Tc technetium —	44 Ru ruthenium 101	45 Rh rhodium 103	46 Pd palladium 106
55 Cs caesium 133	56 Ba barium 137	57–71 lanthanoids	72 Hf hafnium 178	73 Ta tantalum 181	74 W tungsten 184	75 Re rhenium 186	76 Os osmium 190	77 Ir iridium 192	78 Pt platinum 195
87 Fr francium —	88 Ra radium —	89–103 actinoids	104 Rf rutherfordium —	105 Db dubnium —	106 Sg seaborgium —	107 Bh bohrium —	108 Hs hassium —	109 Mt meitnerium —	110 Ds darmstadtium —
			111 Rg roentgenium —	112 Cn copernicium —	113 Nh nihonium —	114 Fl flerovium —	115 Mc moscovium —	116 Lv livermorium —	117 Ts tennessine —
			118 Og oganesson —	119 Uu unbinilium —	120 Uub unbinilium —	121 Uut unbinilium —	122 Uuq unbinilium —	123 Uuq unbinilium —	124 Uuq unbinilium —
			125 Uup unbinilium —	126 Uuq unbinilium —	127 Uuq unbinilium —	128 Uuq unbinilium —	129 Uuq unbinilium —	130 Uuq unbinilium —	131 Uuq unbinilium —
			132 Uuq unbinilium —	133 Uuq unbinilium —	134 Uuq unbinilium —	135 Uuq unbinilium —	136 Uuq unbinilium —	137 Uuq unbinilium —	138 Uuq unbinilium —
			139 Uuq unbinilium —	140 Uuq unbinilium —	141 Uuq unbinilium —	142 Uuq unbinilium —	143 Uuq unbinilium —	144 Uuq unbinilium —	145 Uuq unbinilium —
			146 Uuq unbinilium —	147 Uuq unbinilium —	148 Uuq unbinilium —	149 Uuq unbinilium —	150 Uuq unbinilium —	151 Uuq unbinilium —	152 Uuq unbinilium —
			153 Uuq unbinilium —	154 Uuq unbinilium —	155 Uuq unbinilium —	156 Uuq unbinilium —	157 Uuq unbinilium —	158 Uuq unbinilium —	159 Uuq unbinilium —
			160 Uuq unbinilium —	161 Uuq unbinilium —	162 Uuq unbinilium —	163 Uuq unbinilium —	164 Uuq unbinilium —	165 Uuq unbinilium —	166 Uuq unbinilium —
			167 Uuq unbinilium —	168 Uuq unbinilium —	169 Uuq unbinilium —	170 Uuq unbinilium —	171 Uuq unbinilium —	172 Uuq unbinilium —	173 Uuq unbinilium —
			174 Uuq unbinilium —	175 Uuq unbinilium —	176 Uuq unbinilium —	177 Uuq unbinilium —	178 Uuq unbinilium —	179 Uuq unbinilium —	180 Uuq unbinilium —
			181 Uuq unbinilium —	182 Uuq unbinilium —	183 Uuq unbinilium —	184 Uuq unbinilium —	185 Uuq unbinilium —	186 Uuq unbinilium —	187 Uuq unbinilium —
			188 Uuq unbinilium —	189 Uuq unbinilium —	190 Uuq unbinilium —	191 Uuq unbinilium —	192 Uuq unbinilium —	193 Uuq unbinilium —	194 Uuq unbinilium —
			195 Uuq unbinilium —	196 Uuq unbinilium —	197 Uuq unbinilium —	198 Uuq unbinilium —	199 Uuq unbinilium —	200 Uuq unbinilium —	201 Uuq unbinilium —
			202 Uuq unbinilium —	203 Uuq unbinilium —	204 Uuq unbinilium —	205 Uuq unbinilium —	206 Uuq unbinilium —	207 Uuq unbinilium —	208 Uuq unbinilium —
			209 Uuq unbinilium —	210 Uuq unbinilium —	211 Uuq unbinilium —	212 Uuq unbinilium —	213 Uuq unbinilium —	214 Uuq unbinilium —	215 Uuq unbinilium —
			216 Uuq unbinilium —	217 Uuq unbinilium —	218 Uuq unbinilium —	219 Uuq unbinilium —	220 Uuq unbinilium —	221 Uuq unbinilium —	222 Uuq unbinilium —
			223 Uuq unbinilium —	224 Uuq unbinilium —	225 Uuq unbinilium —	226 Uuq unbinilium —	227 Uuq unbinilium —	228 Uuq unbinilium —	229 Uuq unbinilium —
			230 Uuq unbinilium —	231 Uuq unbinilium —	232 Uuq unbinilium —	233 Uuq unbinilium —	234 Uuq unbinilium —	235 Uuq unbinilium —	236 Uuq unbinilium —
			237 Uuq unbinilium —	238 Uuq unbinilium —	239 Uuq unbinilium —	240 Uuq unbinilium —	241 Uuq unbinilium —	242 Uuq unbinilium —	243 Uuq unbinilium —
			244 Uuq unbinilium —	245 Uuq unbinilium —	246 Uuq unbinilium —	247 Uuq unbinilium —	248 Uuq unbinilium —	249 Uuq unbinilium —	250 Uuq unbinilium —
			251 Uuq unbinilium —	252 Uuq unbinilium —	253 Uuq unbinilium —	254 Uuq unbinilium —	255 Uuq unbinilium —	256 Uuq unbinilium —	257 Uuq unbinilium —
			258 Uuq unbinilium —	259 Uuq unbinilium —	260 Uuq unbinilium —	261 Uuq unbinilium —	262 Uuq unbinilium —	263 Uuq unbinilium —	264 Uuq unbinilium —
			265 Uuq unbinilium —	266 Uuq unbinilium —	267 Uuq unbinilium —	268 Uuq unbinilium —	269 Uuq unbinilium —	270 Uuq unbinilium —	271 Uuq unbinilium —
			272 Uuq unbinilium —	273 Uuq unbinilium —	274 Uuq unbinilium —	275 Uuq unbinilium —	276 Uuq unbinilium —	277 Uuq unbinilium —	278 Uuq unbinilium —
			279 Uuq unbinilium —	280 Uuq unbinilium —	281 Uuq unbinilium —	282 Uuq unbinilium —	283 Uuq unbinilium —	284 Uuq unbinilium —	285 Uuq unbinilium —
			286 Uuq unbinilium —	287 Uuq unbinilium —	288 Uuq unbinilium —	289 Uuq unbinilium —	290 Uuq unbinilium —	291 Uuq unbinilium —	292 Uuq unbinilium —
			293 Uuq unbinilium —	294 Uuq unbinilium —	295 Uuq unbinilium —	296 Uuq unbinilium —	297 Uuq unbinilium —	298 Uuq unbinilium —	299 Uuq unbinilium —
			300 Uuq unbinilium —	301 Uuq unbinilium —	302 Uuq unbinilium —	303 Uuq unbinilium —	304 Uuq unbinilium —	305 Uuq unbinilium —	306 Uuq unbinilium —
			307 Uuq unbinilium —	308 Uuq unbinilium —	309 Uuq unbinilium —	310 Uuq unbinilium —	311 Uuq unbinilium —	312 Uuq unbinilium —	313 Uuq unbinilium —
			314 Uuq unbinilium —	315 Uuq unbinilium —	316 Uuq unbinilium —	317 Uuq unbinilium —	318 Uuq unbinilium —	319 Uuq unbinilium —	320 Uuq unbinilium —
			321 Uuq unbinilium —	322 Uuq unbinilium —	323 Uuq unbinilium —	324 Uuq unbinilium —	325 Uuq unbinilium —	326 Uuq unbinilium —	327 Uuq unbinilium —
			328 Uuq unbinilium —	329 Uuq unbinilium —	330 Uuq unbinilium —	331 Uuq unbinilium —	332 Uuq unbinilium —	333 Uuq unbinilium —	334 Uuq unbinilium —
			335 Uuq unbinilium —	336 Uuq unbinilium —	337 Uuq unbinilium —	338 Uuq unbinilium —	339 Uuq unbinilium —	340 Uuq unbinilium —	341 Uuq unbinilium —
			342 Uuq unbinilium —	343 Uuq unbinilium —	344 Uuq unbinilium —	345 Uuq unbinilium —	346 Uuq unbinilium —	347 Uuq unbinilium —	348 Uuq unbinilium —
			349 Uuq unbinilium —	350 Uuq unbinilium —	351 Uuq unbinilium —	352 Uuq unbinilium —	353 Uuq unbinilium —	354 Uuq unbinilium —	355 Uuq unbinilium —
			356 Uuq unbinilium —	357 Uuq unbinilium —	358 Uuq unbinilium —	359 Uuq unbinilium —	360 Uuq unbinilium —	361 Uuq unbinilium —	362 Uuq unbinilium —
			363 Uuq unbinilium —	364 Uuq unbinilium —	365 Uuq unbinilium —	366 Uuq unbinilium —	367 Uuq unbinilium —	368 Uuq unbinilium —	369 Uuq unbinilium —
			370 Uuq unbinilium —	371 Uuq unbinilium —	372 Uuq unbinilium —	373 Uuq unbinilium —	374 Uuq unbinilium —	375 Uuq unbinilium —	376 Uuq unbinilium —
			377 Uuq unbinilium —	378 Uuq unbinilium —	379 Uuq unbinilium —	380 Uuq unbinilium —	381 Uuq unbinilium —	382 Uuq unbinilium —	383 Uuq unbinilium —
			384 Uuq unbinilium —	385 Uuq unbinilium —	386 Uuq unbinilium —	387 Uuq unbinilium —	388 Uuq unbinilium —	389 Uuq unbinilium —	390 Uuq unbinilium —
			391 Uuq unbinilium —	392 Uuq unbinilium —	393 Uuq unbinilium —	394 Uuq unbinilium —	395 Uuq unbinilium —	396 Uuq unbinilium —	397 Uuq unbinilium —
			398 Uuq unbinilium —	399 Uuq unbinilium —	400 Uuq unbinilium —	401 Uuq unbinilium —	402 Uuq unbinilium —	403 Uuq unbinilium —	404 Uuq unbinilium —
			405 Uuq unbinilium —	406 Uuq unbinilium —	407 Uuq unbinilium —	408 Uuq unbinilium —	409 Uuq unbinilium —	410 Uuq unbinilium —	411 Uuq unbinilium —
			412 Uuq unbinilium —	413 Uuq unbinilium —	414 Uuq unbinilium —	415 Uuq unbinilium —	416 Uuq unbinilium —	417 Uuq unbinilium —	418 Uuq unbinilium —
			419 Uuq unbinilium —	420 Uuq unbinilium —	421 Uuq unbinilium —	422 Uuq unbinilium —	423 Uuq unbinilium —	424 Uuq unbinilium —	425 Uuq unbinilium —
			426 Uuq unbinilium —	427 Uuq unbinilium —	428 Uuq unbinilium —	429 Uuq unbinilium —	430 Uuq unbinilium —	431 Uuq unbinilium —	432 Uuq unbinilium —
			433 Uuq unbinilium —	434 Uuq unbinilium —	435 Uuq unbinilium —	436 Uuq unbinilium —	437 Uuq unbinilium —	438 Uuq unbinilium —	439 Uuq unbinilium —
			440 Uuq unbinilium —	441 Uuq unbinilium —	442 Uuq unbinilium —	443 Uuq unbinilium —	444 Uuq unbinilium —	445 Uuq unbinilium —	446 Uuq unbinilium —
			447 Uuq unbinilium —	448 Uuq unbinilium —	449 Uuq unbinilium —	450 Uuq unbinilium —	451 Uuq unbinilium —	452 Uuq unbinilium —	453 Uuq unbinilium —
			454 Uuq unbinilium —	455 Uuq unbinilium —	456 Uuq unbinilium —	457 Uuq unbinilium —	458 Uuq unbinilium —	459 Uuq unbinilium —	460 Uuq unbinilium —
			461 Uuq unbinilium —	462 Uuq unbinilium —	463 Uuq unbinilium —	464 Uuq unbinilium —	465 Uuq unbinilium —	466 Uuq unbinilium —	467 Uuq unbinilium —
			468 Uuq unbinilium —	469 Uuq unbinilium —	470 Uuq unbinilium —	471 Uuq unbinilium —	472 Uuq unbinilium —	473 Uuq unbinilium —	474 Uuq unbinilium —
			475 Uuq unbinilium —	476 Uuq unbinilium —	477 Uuq unbinilium —	478 Uuq unbinilium —	479 Uuq unbinilium —	480 Uuq unbinilium —	481 Uuq unbinilium —
			482 Uuq unbinilium —	483 Uuq unbinilium —	484 Uuq unbinilium —	485 Uuq unbinilium —	486 Uuq unbinilium —	487 Uuq unbinilium —	488 Uuq unbinilium —
			489 Uuq unbinilium —	490 Uuq unbinilium —	491 Uuq unbinilium —	492 Uuq unbinilium —	493 Uuq unbinilium —	494 Uuq unbinilium —	495 Uuq unbinilium —
			496 Uuq unbinilium —	497 Uuq unbinilium —	498 Uuq unbinilium —	499 Uuq unbinilium —	500 Uuq unbinilium —	501 Uuq unbinilium —	502 Uuq unbinilium —
			503 Uuq unbinilium —	504 Uuq unbinilium —	505 Uuq unbinilium —	506 Uuq unbinilium —	507 Uuq unbinilium —	508 Uuq unbinilium —	509 Uuq unbinilium —
			510 Uuq unbinilium —	511 Uuq unbinilium —	512 Uuq unbinilium —	513 Uuq unbinilium —	514 Uuq unbinilium —	515 Uuq unbinilium —	516 Uuq unbinilium —
			517 Uuq unbinilium —	518 Uuq unbinilium —	519 Uuq unbinilium —	520 Uuq unbinilium —	521 Uuq unbinilium —	522 Uuq unbinilium —	523 Uuq unbinilium —
			524 Uuq unbinilium —	525 Uuq unbinilium —	526 Uuq unbinilium —	527 Uuq unbinilium —	528 Uuq unbinilium —	529 Uuq unbinilium —	530 Uuq unbinilium —